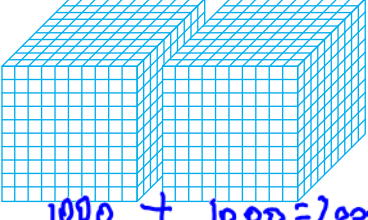
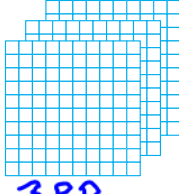
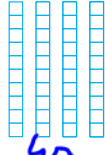

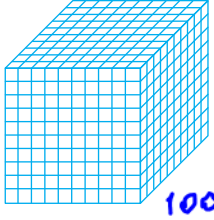
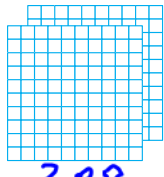
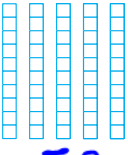

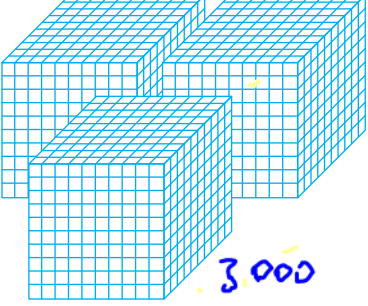
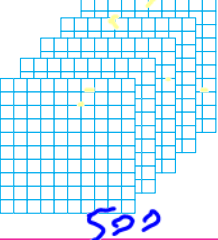
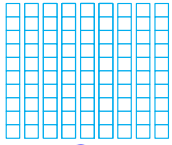



4. Aşağıda onluk taban bloklarıyla modellenmiş olan toplama işleminde, modellenen sayıları ve sayıların toplamını noktalı yerlere yazınız.

Sayılar	Binlik	Yüzlük	Onluk	Birlik
1. sayı 2345	 1000 + 1000 = 2000 300	 300	 40	 5
2. sayı 1253	 1000	 200	 50	 3
Toplam 3598	 3000	 500	 90	 8

www.pekiyi.com

5. Aşağıdaki tablolarda belirtilen işlemleri yaparak boş bırakılan yerleri doldurunuz.

+	527	497
265	792	762
136	663	633

-	119	334
590	471	256
542	423	208

6. Aşağıda verilen çarpma ve bölme işlemlerinin sonucunu bulunuz.

a) 44×11
484

b) 52×24
1248

c) $144 \div 6$
24

ç) $258 \div 16$
16

7. Aşağıdaki bölme işlemlerinin sonucunu tahmin ediniz.

a) $85 \div 11$

b) $574 \div 6$

c) $812 \div 4$

ç) $495 \div 51$

90 : 10 = 9

570 : 5 = 114

800 : 4 = 200

500 : 50 = 10

www.pekiyi.com

10 www.pekiyi.com