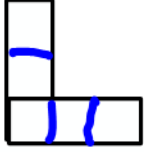


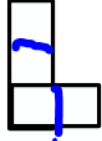
ALİŞTIRMALAR

1. Yanda verilen yapının önden, arkadan, sağdan, soldan ve üstten görünümünü kareli kâğıda çizin.

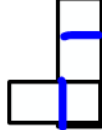
Önden-arkadan ve sağdan-soldan görünümünü karşılaştırınız.



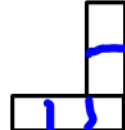
önden




Soldan



sağdan



arkadan




ön

sağ

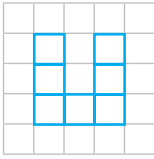
2. Yanda verilen yapının arkadan görünümü aşağıdakilerden hangisinde doğru verilmiştir?

www.ogretmenler.com

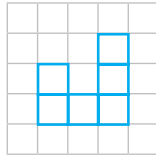


Ön

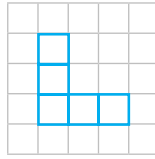
A.



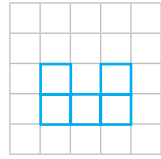
B



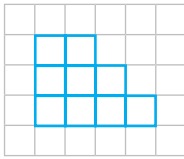
C.




D.



3. Yanda verilen yapının hangi yönden görünümü şekildedir?



şekildedir?



Ön

www.ogretmenler.com


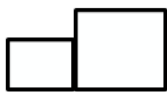
A. Önden

B. Sağdan

C. Arkadan

D. Üstten

4. Yanda geometrik cisimlerle oluşturulmuş yapının önden, arkadan, sağdan, soldan ve üstten görünümünü kareli kâğıt üzerine çizin. Önden-arkadan ve sağdan-soldan görünümünü karşılaştırınız.



Ön